

Practise Test for Learner's Licence

Choose A, B or C
Make a circle or cross over your answer

Name: _____

1 What is the speed limit on urban roads?

- (A) 60 km/h
- (B) 100 km/h
- (C) 120 km/h



2 What is the most important rule of the road?

- (A) Do not overtake on rural roads
- (B) You always have the right of way
- (C) Keep left, pass right

3 At a stop sign, you must:

- (A) Bring your car to a complete stop and proceed only when it is safe to do so
- (B) Slow down and if it is safe you may proceed
- (C) Stop on the white line painted on the road



4 At a pedestrian crossing:

- (A) Pedestrians wishing to cross should yield to you
- (B) Always stop for pedestrians and once they have crossed and it is safe you may proceed
- (C) Reduce speed and continue driving as you have the right of way



5 You are not allowed to park:

- (A) Within 1.5 metres from a fire hydrant
- (B) Less than 5 metres from an intersection
- (C) A and B

6 Emergency vehicles:

- (A) Always have the right of way when their alarms or sirens are activated
- (B) Always have the right of way
- (C) Can drive as fast as they want

7 When towing a vehicle, the distance between the two vehicles must not be:


- (A) Greater than 3 metres
- (B) Greater than 3.5 metres
- (C) Greater than 4.5 metres

8 How long after a collision do you have to report the collision to the police?

- (A) Stop your car immediately
- (B) Within 24 hrs. after the collision
- (C) Within 72 hrs. after the collision

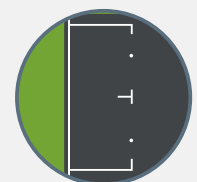
9 Choose the road surface marking displayed.

- (A) No overtaking line
- (B) You may overtake on the right-hand side
- (C) Dividing line



10 Choose the road surface as shown in the picture.

- (A) Park with all the wheels within the marking
- (B) Two vehicles may park here
- (C) No parking area






Be safe.
Be smart.

K53 Learner's Licence

Imperial

11 Choose the warning sign displayed.

- (A) T-junction ahead
- (B) Dead end ahead
- (C) Detour ahead



12 Choose the warning sign displayed.

- (A) Sharp curve ahead to your left or your right
- (B) Right turn only
- (C) No left turn



13 Choose the warning sign displayed.

- (A) Maximum mass height 4.42 kg on the bridge
- (B) Minimal speed 4.42 km/h
- (C) Maximum height restriction ahead




14 Choose the regulatory sign displayed.

- (A) Only busses allowed
- (B) Start of a lane reserved for buses only
- (C) Start of the rest areas for buses




15 Choose the information sign displayed.

- (A) T-junction ahead
- (B) Lane reserved for taxis
- (C) Cull de sac



16 Choose the information sign displayed.

- (A) Steep hill, heavy vehicles must stay in the left lane
- (B) Steep hill, heavy vehicles must change to a lower gear
- (C) Steep hill, heavy vehicles must slow down



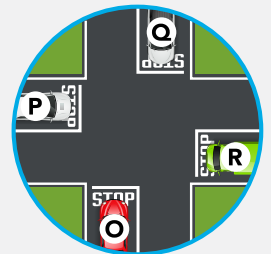
17 When you come to an intersection and the road ahead is backed up with vehicles travelling in the same direction, what should you do?

- (A) Proceed if there is no traffic on your right
- (B) Wait until there is room for you to completely cross the intersection
- (C) Travel into the intersection and wait until traffic ahead moves



18 Vehicle O is at a stop sign;

- (A) Vehicle O must give way to vehicles P, Q, R
- (B) Vehicle O must give way only to vehicle R
- (C) All vehicles must give way to vehicle O



19 Even if the signal at a railway level crossing does not indicate that a train is coming, you should:

- (A) Slow down, be ready to stop and give way if there is danger of collision
- (B) Speed up and cross the tracks quickly
- (C) Always stop completely

20 You wish to turn left at this traffic circle. Which lane may you use?

- (A) Left lane
- (B) Right lane
- (C) Either lane

